




7. Zapiš noty v husľovom klúči: cis 3, asas 1, h 2, fisis 1, a, g 3, deses 2, e 3, fes 2, dis 3




8. Utvor intervaly od tónov d, g e1 : v.6, m.3, č.5, m.2, v.7, č.4, v.3, m.7




1. Napíš stupnicu H dur, troj kvintakord a jeho obraty, a T, D kvintakord



2. Napíš stupnicu D dur, troj kvintakord a jeho obraty, a T, D kvintakord



3. Napíš stupnicu F mol melodičku



4. Napíš stupnicu cis mol harmonickú

